


Name: _____

Date: _____

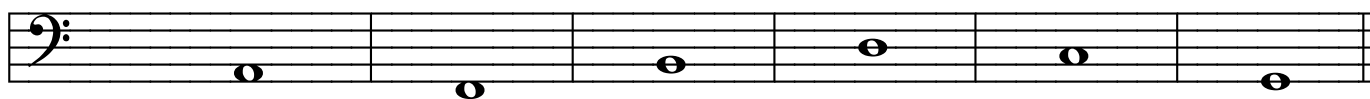
Writing Intervals

MUSIC THEORY WORKSHEET

Write a note that is the given interval ABOVE the notes in each measure below. Use whole notes.



3rd 5th 2nd 6th 3rd 4th




5th 7th 2nd 4th 8th 7th




4th 3rd 8th 6th 5th 2nd

Write a note that is the given interval BELOW the notes in each measure below. Use whole notes.



2nd 4th 7th 5th 3rd 4th



8th 5th 3rd 2nd 6th 8th



6th 4th 7th 5th 2nd 3rd